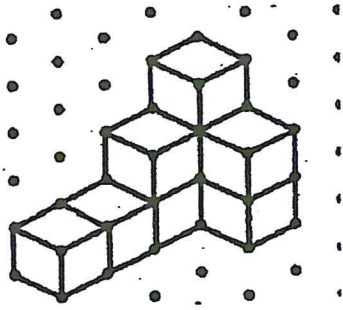


Name _____
 Date _____ Per _____ A# _____

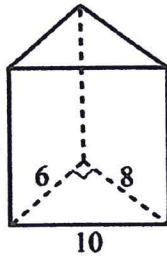
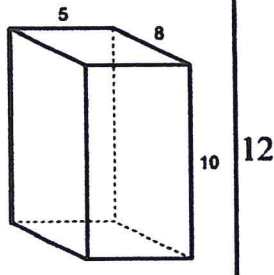
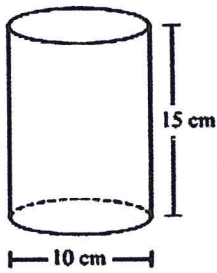
Volume and Surface Area Review



(Just count!)

Volume _____ units

Surface Area _____ units



Cylinder

Area of Base = _____ = _____

Height = _____

Volume = _____ = _____

Sketch the FACES and label the dimensions:

Surface Area:

Top = _____ = _____

Bottom = _____ = _____

Lateral Face = _____ = _____

Total Surface Area = _____

Rectangular Prism

Area of Base = _____ = _____

Height = _____

Volume = _____ = _____

Sketch the FACES and label the dimensions:

Surface Area:

Top = _____ = _____

Bottom = _____ = _____

Front Face = _____ = _____

Back Face = _____ = _____

Right Face = _____ = _____

Left Face = _____ = _____

Total Surface Area = _____

Triangular Prism

Area of Base = _____ = _____

Height = _____

Volume = _____ = _____

Sketch the FACES and label the dimensions:

Surface Area:

Top = _____ = _____

Bottom = _____ = _____

Face = _____ = _____

Face = _____ = _____

Face = _____ = _____

Total Surface Area = _____