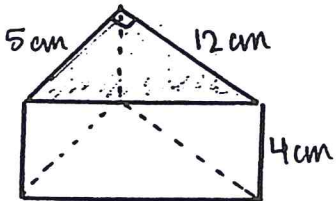

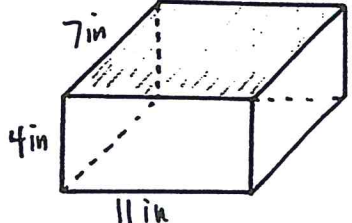


Name _____
 Date _____ Per _____ A# _____

Volume + Surface Area Review

Find the volume AND Surface Area of each prism. Show all subproblems.
 units. Circle your final answer.

Remember the proper

<p>1.</p> 	<p>2.</p> 	<p>3.</p> 
<p>Volume</p> <p>Base shape:</p>	<p>Volume</p> <p>Base shape:</p>	<p>Volume</p> <p>Base shape:</p>
<p>Surface Area</p> <p>Find missing hypotenuse:</p> <p>Top base:</p> <p>Bottom base:</p> <p>Side 1:</p> <p>Side 2:</p> <p>Side 3:</p> <p>Total: _____</p>	<p>Surface Area</p> <p>Find the radius:</p> <p>Top base:</p> <p>Bottom base:</p> <p>Find the circumference:</p> <p>Lateral face:</p> <p>Total: _____</p>	<p>Surface Area</p> <p>Top:</p> <p>Bottom:</p> <p>Face:</p> <p>Face:</p> <p>Face:</p> <p>Face:</p> <p>Total: _____</p>